



GOVT. OF NCT OF DELHI
Delhi Subordinate Services Selection Board
FC-18, Institutional Area, Karkardooma, Delhi – 110092.
www.dsssb.delhigovt.nic.in

Participant ID	
Participant Name	
Test Center Name	
Test Date	03/09/2019
Test Time	4:30 PM - 6:30 PM
Subject	GRADE IV DASS JUNIOR ASSISTANT

Section : Mental Ability1

Q.1 In the following question, select the related letter/word/number from the given alternatives.

CG : EI :: _____

- Ans
- ☒ 1. FK : JK
 - ☒ 2. FJ : GK
 - ☒ 3. IJ : KH
 - ☒ 4. GJ : LM

Question ID : 54592721017

Q.2 In a certain code language, if MENTION = 49 and NEUROTIC = 64, then MARVELLOUS = ?

- Ans
- ☒ 1. 81
 - ☒ 2. 121
 - ☒ 3. 100
 - ☒ 4. 88

Question ID : 54592721018

Q.3 In the question below, there are three statements followed by three conclusions. You have to take the given statements to be true even if they seem to be at variance with commonly known facts and then decide which of the given conclusion logically follow(s) from the given statements.

Statements:

- I. All tires are wires.
- II. All wires are tents.
- III. All tents are cans.

Conclusions:

- I. Some cans are wires.
- II. Some tents are tires.
- III. Some cans are tires.

- Ans
- ☒ 1. only conclusion II and III follow.
 - ☒ 2. All conclusions I, II and III follow.
 - ☒ 3. only conclusion I and III follow.
 - ☒ 4. only conclusion I and II follow.

Question ID : 54592721026

Q.4 Raghav ranks eighth from the top and 31st from the bottom. How many students are there in the class?

- Ans
- ☒ 1. 40
 - ☒ 2. 38
 - ☒ 3. 39
 - ☒ 4. 43

Question ID : 54592721023

Q.5 Eight students L, B, S, D, M, F, O and H are going for a car racing. There are only two cars and following are the conditions:

- (i) Four students can sit in one car.
- (ii) L and D sit in a same car but not with H.
- (iii) B and S cannot sit in the same car in which D is sitting.
- (iv) F will sit in the car along with L and M but certainly not with O.

If H and O are sitting in the same car, who are other two students sitting in the same car?

- Ans
- ☒ 1. M and B
 - ☒ 2. B and S
 - ☒ 3. L and S
 - ☒ 4. F and B

Question ID : 54592721024

Q.6 Pointing to a boy Neha said, 'He is the son of my grandfather's only child. How is she related to that boy?

- Ans
- ☒ 1. Mother
 - ☒ 2. Cannot be determined
 - ☒ 3. Aunt
 - ☒ 4. Sister

Question ID : 54592721025

Q.7 If all the Letters of the word 'SEAT' are arranged according to Dictionary then which word will come Third from the right end?

- Ans
- ☒ 1. E
 - ☒ 2. T
 - ☒ 3. S
 - ☒ 4. A

Question ID : 54592721011

Q.8 There are five friends -S, K, M, A and R. S is shorter than K but taller than R. M is the tallest. A is a little shorter than K and little taller than S. Who has two persons taller and two persons shorter than him?

- Ans
- ☒ 1. A
 - ☒ 2. K
 - ☒ 3. R
 - ☒ 4. S

Q.9 For the Assertion (A) and Reason (R) given below, choose the correct alternative from the following:

Assertion (A): Akbar is also known as Jahangir.
Reason (R): Akbar was a strict administrator of Islamic law.

- Ans
- ☒ 1. Both (A) and (R) are false
 - ☐ 2. Both (A) and (R) are true and (R) is the correct explanation of (A)
 - ☐ 3. Both (A) and (R) are true, but (R) is not the correct explanation Of (A)
 - ☐ 4. (A) is true, but (R) is false

Q.10 Find the odd one out from the given alternatives.

- Ans
- ☐ 1. Sofa set
 - ☒ 2. Carpet
 - ☐ 3. Bench
 - ☐ 4. stool

Q.11 At an Ice cream parlour, six ice creams are arranged in a circular order on the table. Butterscotch is opposite to Kulfi, there is only one ice cream between Chocolate flavor and Strawberry flavor ice cream. Vanilla is to the immediate right of Kulfi. Mango flavor is also one of the ice creams. Which ice cream is placed opposite to Vanilla?

- Ans
- ☐ 1. Chocolate
 - ☒ 2. Either chocolate or strawberry
 - ☐ 3. Vanilla
 - ☐ 4. Strawberry

Q.12 From the given responses, find the missing letter in the series:

AD, BH, CL, DP, ?

- Ans
- ☐ 1. EU
 - ☐ 2. MN
 - ☐ 3. KL
 - ☒ 4. ET

Q.13 For the following groups of letters given in Column I, the codes are given in Column II. Answer the question by finding the codes for the groups from the given columns.

Column I	Column II
(A) to provide order time	pa ka mo ni
(B) next time to her	za ni pa tu
(C) place order to provide	ok mo pa ka
(D) once at next order	sa ri za mo

What is the code for 'her' and 'provide'?

- Ans ☒ 1. tu and ka
☐ 2. ni and tu
☐ 3. sa and za
☐ 4. ok and pa

Question ID : 54592721020

Q.14 Find out the next term.

G9K, M15Q, S21W, ?

- Ans ☒ 1. Y1C
☐ 2. A6C
☐ 3. Z2B
☐ 4. W5E

Question ID : 54592721010

Q.15 If CCTV is called Television, Television is called Radio, Radio is called Pen and Pen is called Fan, then which is used to write?

- Ans ☐ 1. Pen
☒ 2. Fan
☐ 3. CCTV
☐ 4. Radio

Question ID : 54592721019

Q.16 In the following question given below, there is an incomplete series as shown by question mark. This term is given as one of the alternatives. Mark the correct alternative.

16, 22, 34, 58, ?

- Ans ☐ 1. 98
☐ 2. 108
☒ 3. 106
☐ 4. 172

Question ID : 54592721028

Q.17 In each of the following questions, certain pairs of words are given, out of which the words in all pairs except one, bear a certain common relationship. Choose the pair in which the words are differently related.

- Ans ☐ 1. Actor : Choreography
☐ 2. Actor : Singing
☒ 3. Farmer : Farming
☐ 4. Dancer : Direction

Question ID : 54592721013

Q.18 Choose the odd one from the given alternatives.

- Ans
- ☒ 1. GN : GZ
 - ☒ 2. DI : DY
 - ☒ 3. EJ : EY
 - ☒ 4. CF : CZ

Question ID : 54592721014

Q.19 In the following question, select the related letter/word/number from the given alternatives.

PAINTING : ARTIST :: Cook: _____

- Ans
- ☒ 1. Singer
 - ☒ 2. Novel
 - ☒ 3. Meal
 - ☒ 4. Music

Question ID : 54592721015

Q.20 In the following question, select the related letter/word/number from the given alternatives.

ZAB : DEF :: _____ : NOP

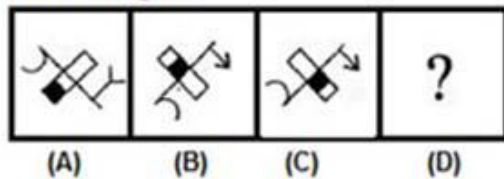
- Ans
- ☒ 1. JHI
 - ☒ 2. GHI
 - ☒ 3. HIJ
 - ☒ 4. GIH

Question ID : 54592721016

Section : Mental Ability2

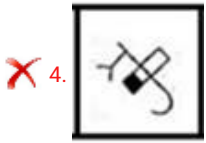
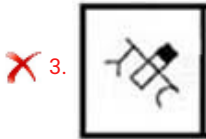
Q.1 Choose an appropriate figure from the four numbered figures for the place of the questions mark (?).

Problem figure



Ans

- ☒ 1.
- ☒ 2.



Question ID : 54592721042

Q.2 Choose the odd numeral pair/group in each of the following question :

- Ans
- ✗ 1. 1 (9) 2
 - ✗ 2. 5 (854) 9
 - ✓ 3. 4 (442) 7
 - ✗ 4. 3 (243) 6

Question ID : 54592721032

Q.3 In the question given below, there is a statement followed by two conclusions. You have to take the given statement to be true even if they seem to be at variance with commonly known facts and then decide which of the given conclusion logically follow(s) from the given statements.

Statement:

$$T \geq O = I \geq L = D$$

Conclusions:

I. $D < T$


II. $D = T$

- Ans
- ✗ 1. Only conclusion II follow
 - ✗ 2. Only conclusion I follow
 - ✓ 3. Either Conclusion I or II follow
 - ✗ 4. Neither conclusion I nor II follow

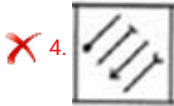
Question ID : 54592721036

Q.4 The second figure in the first unit of the problem figures bears a certain relationship to the first figure. Select that figure from the set of answer figures which would come in the place of question mark (?) and bear the same relation.

Problem Figures



- Ans
- ✗ 1.
 - ✗ 2.



Question ID : 54592721041

Q.5 Find the wrong term in the given series:

2, 3, 6, 10, 18, 27

Ans ✓ 1. 10

✗ 2. 18

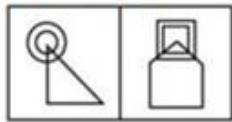
✗ 3. 6

✗ 4. 2

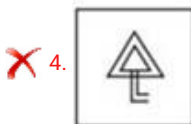
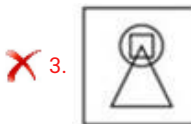
Question ID : 54592721029

Q.6 In following question, a set of two figures forming the problem figure and four answer figures marked as (a), (b), (c) and (d) are given. Select a answer figure which possess the same characteristic.

Problem figures



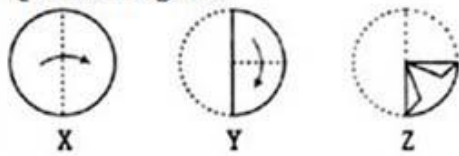
Ans



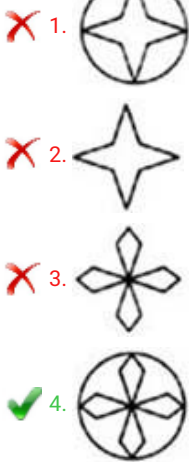
Question ID : 54592721040

Q.7 A piece of paper is folded in the manner shown in the question figure(s). Select the figure out of the unfolded pattern after the punches (cut).

Question Figure:

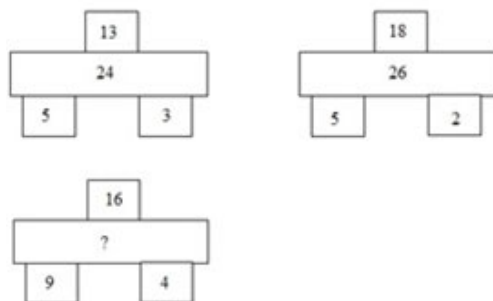


Ans



Question ID : 54592721045

Q.8 Find the missing term?



Ans

- ☒ 1. 27
- ☒ 2. 28
- ☒ 3. 32
- ☒ 4. 15

Question ID : 54592721034

Q.9 If $4 \times 24 = 6$, $2 \times 8 = 4$, $1 \times 3 = 3$, then find the value of 7×21 ?

Ans

- ☒ 1. 42
- ☒ 2. 3
- ☒ 3. 63
- ☒ 4. 21

Question ID : 54592721037

Q.10 Choose the correct water image from the given alternatives.

Problem Figures



Ans

- ☒ 1.
- ☒ 2.
- ☒ 3.
- ☒ 4.

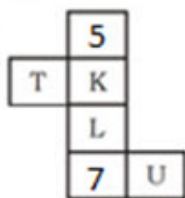
Question ID : 54592721044

Q.11 A cube of 25 cm side is divided into 125 smaller cubes of equal volume. Find the side of smaller cubes.

- Ans
- ☒ 1. 3 cm
 - ☒ 2. 6 cm
 - ☒ 3. 2 cm
 - ☒ 4. 5 cm

Question ID : 54592721048

Q.12 In the following question an unfolded dice is given. From the given alternatives which of the following will be opposite to 5?



- Ans
- ☒ 1. U
 - ☒ 2. K
 - ☒ 3. T
 - ☒ 4. L

Question ID : 54592721047

Q.13 If '+' means 'x', '-' means '+', 'x' means '÷' and '÷' means '-', then answer the following questions based on this information.

$$9 - 3 + 2 \div 16 \times 2 = ?$$

- Ans
- ☒ 1. 6
 - ☒ 2. 5

✓ 3.7

✗ 4.9

Question ID : 54592721035

Q.14 Find out which of the figure (a), (b), (c), (d) can be formed from the pieces given in fig. (X).

Question

Figure



Ans

✗ 1.



✓ 2.



✗ 3.



✗ 4.



Question ID : 54592721046

Q.15 Choose the odd one from the given options:

Ans ✓ 1. 23, 65

✗ 2. 83, 64

✗ 3. 79, 34

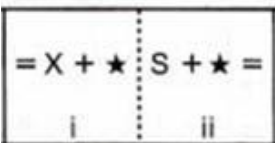
✗ 4. 47, 86

Question ID : 54592721031

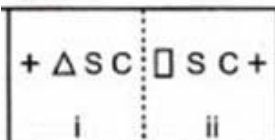
Q.16 In the following questions, element (ii) is related to element (i) in a particular way. Find out the pair of figures in which the elements are not related to each other.

Ans

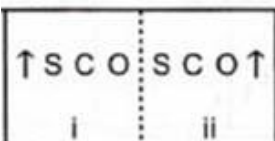
✗ 1.



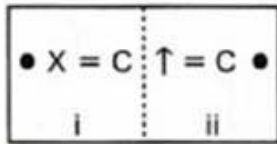
✗ 2.



✓ 3.

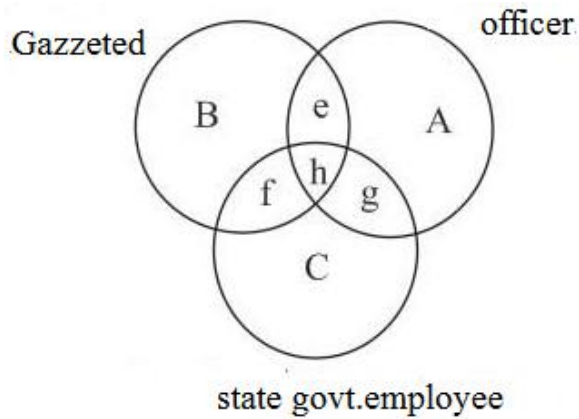


✗ 4.



Question ID : 54592721043

Q.17 Which one of the following represents Officers who are Gazzeted but not state Government employee?



Ans

✗ 1. g

✗ 2. h

✓ 3. e

✗ 4. f

Question ID : 54592721039

Q.18 In the following question, select the related letter/word/number from the given alternatives.

(182, 15, 12)

Ans

✗ 1. (112, 10, 14)

✓ 2. (112, 10, 11)

✗ 3. (112, 10, 12)

✗ 4. (112, 10, 16)

Question ID : 54592721033

Q.19 Choose the odd one from the given options:

Ans

✗ 1. 373

✓ 2. 455

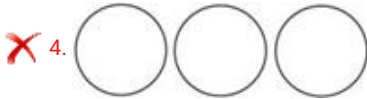
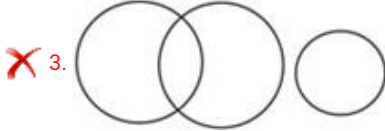
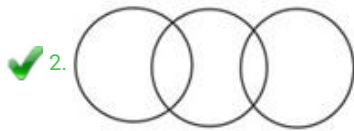
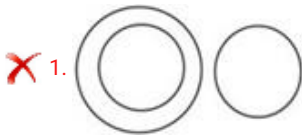
✗ 3. 463

✗ 4. 544

Question ID : 54592721030

Q.20 Which of the following diagrams best represents a relationship among Platinum, Ornament and Gold?

Ans



Question ID : 54592721038

Section : General Awareness1

Q.1 Which of the following statements about MSP or Minimum Support Price is incorrect?

- Ans
- ✗ 1. Freezing of MSP for a few years should be considered by the deciding authority.
 - ✓ 2. The MSP is decided by the FCI or Food Corporation of India.
 - ✗ 3. Rising MSP's have raised the maintenance cost of procuring foodgrains.
 - ✗ 4. The MSPs are declared every year.

Question ID : 54592721055

Q.2 These soils develop in areas with high temperature and high rainfall. These are the result of intense leaching due to tropical rains. Humus content of the soil is removed fast by bacteria that thrives well in high temperature. These soils are poor in organic matter, nitrogen, phosphate and calcium, while iron oxide and potash are in excess. Hence, these are not suitable for cultivation. Which type of soil is this?

- Ans
- ✗ 1. Red and yellow
 - ✗ 2. Black
 - ✓ 3. Laterite
 - ✗ 4. Alluvial

Question ID : 54592721067

Q.3 The approximate length of the Great Himalayan range, also known as the central axial range, is (i) _____ km from east to west, and their width varies between (ii) _____ km from north to south.

- Ans
- ✗ 1. (i) 6000km and (ii) 400 - 600km
 - ✗ 2. (i) 1,500km and (ii) 200km
 - ✗ 3. (i) 4000km and (ii) 300km
 - ✓ 4. (i) 2,500km and (ii) 160 - 400km

Question ID : 54592721068

Q.4 Which of the following nutrients keep our skin and eyes healthy?

- Ans
- ☒ 1. Proteins
 - ☒ 2. Fats
 - ☒ 3. Vitamin A
 - ☒ 4. Carbohydrates

Question ID : 54592721062

Q.5 Which of the following is an example of a green algae?

- Ans
- ☒ 1. Laminaria
 - ☒ 2. Sargassum
 - ☒ 3. Chlamydomonas
 - ☒ 4. Fucus

Question ID : 54592721063

Q.6 This diseases is caused by a pathogenic bacterium and affects the intestines. It can be confirmed by Widal Test. Identify the disease.

- Ans
- ☒ 1. Pneuomonias
 - ☒ 2. Malaria
 - ☒ 3. Typhoid
 - ☒ 4. Cholera

Question ID : 54592721059

Q.7 When we account for the annual income or the annual production of a factory we are actually calculating:

- Ans
- ☒ 1. Net investment of the factory
 - ☒ 2. Stocks of the factory
 - ☒ 3. Flows of the factory
 - ☒ 4. Gross investment of the factory

Question ID : 54592721053

Q.8 In which year did India get its Central Bank?

- Ans
- ☒ 1. 1937
 - ☒ 2. 1935
 - ☒ 3. 1933
 - ☒ 4. 1931

Question ID : 54592721054

Q.9 Lotia is the regional music of:

- Ans
- ☒ 1. Rajasthan
 - ☒ 2. Tamil Nadu
 - ☒ 3. Punjab
 - ☒ 4. Assam

Question ID : 54592721051

Q.10 Which of the following cities is not a capital of India's neighbouring countries?

- Ans
- ☐ 1. Naypyitaw
 - ☐ 2. Kathmandu
 - ☐ 3. Thimpu
 - ☒ 4. Lahore

Question ID : 54592721064

Q.11 Consider the following steps of Wastewater Treatment Plant (WWTP) – i. Impure water goes to grit and sand removal tank, ii. Impure water is allowed to settle in a large tank, iii. Impure water is passed through bar screens - Using the codes given below, arrange the above steps sequentially.

- Ans
- ☐ 1. iii, ii, i
 - ☐ 2. ii, i, iii
 - ☐ 3. i, ii, iii
 - ☒ 4. iii, i, ii

Question ID : 54592721061

Q.12 Which of the following types of cell is present in the human gastric glands?

- Ans
- ☒ 1. Mucus neck cells, peptic or chief cells and parietal or oxyntic cells
 - ☐ 2. Only mucus neck cells and peptic or chief cells
 - ☐ 3. Only peptic or chief cells and parietal or oxyntic cells
 - ☐ 4. Only mucus neck cells

Question ID : 54592721057

Q.13 Through which of the following activities does an organism maintain homeostasis by Regulation processes?

- Ans
- ☒ 1. Sweating and shivering
 - ☐ 2. Formation of thick walled spores to survive unfavourable conditions
 - ☐ 3. Changing body temperature with ambient nature
 - ☐ 4. Temporarily moving away from stressful habitat

Question ID : 54592721058

Q.14 Which of the following pairs are Kharif crops?

- Ans
- ☐ 1. Wheat and Gram
 - ☐ 2. Cotton and Wheat
 - ☒ 3. Rice and Cotton
 - ☐ 4. Gram and Rice

Question ID : 54592721066

Q.15 (i) _____ will help you to (ii) _____ waste products.

- Ans
- ☐ 1. (i) Kabariwalas, (ii) decompose

- ☒ 2. (i) Composting, (ii) reduce
- ☐ 3. (i) Blue and Green bins, (ii) reduce
- ☐ 4. (i) Rechargeable batteries, (ii) segregate

Question ID : 54592721060

Q.16 Which of the following statements is incorrect about the Parallax method?

- Ans** ☒ 1. This method can be used to measure all kinds of distances – large, small, medium and micro.
- ☐ 2. To measure the distance of a far away planet by this method, we observe it from two different positions (observatories).
- ☐ 3. Parallax angle will always be very small while calculating very far off objects.
- ☐ 4. The distance between the two points of observation is called the basis.

Question ID : 54592721056

Q.17 The Census 2011 was the _____ edition of Census in India.

- Ans** ☐ 1. 13th
- ☒ 2. 15th
- ☐ 3. 14th
- ☐ 4. 16th

Question ID : 54592721065

Q.18 Which Indian classical dance can the Odhra Magadha considered as the precursor of?

- Ans** ☒ 1. Odissi
- ☐ 2. Kathakali
- ☐ 3. Kathak
- ☐ 4. Mohiniyattam

Question ID : 54592721049

Q.19 Which of the following festivals is not one of the major festivals in Maharashtra?

- Ans** ☐ 1. Gudi Padwa
- ☒ 2. Bihu
- ☐ 3. Ganesha Festival
- ☐ 4. Marabats and Badgya

Question ID : 54592721052

Q.20 A monument was built by the British at the Apollo Bunder in Mumbai and was designed by the British architect, George Wittet. To commemorate whose visit was this monument built?

- Ans** ☐ 1. King Edward III
- ☒ 2. King George V
- ☐ 3. Prince Edward of Wales
- ☐ 4. Prince Phillip I

Question ID : 54592721050

Section : General Awareness2

Q.1 Who is the author of these books - "Why I Am A Hindu" and "An Era of Darkness"?

- Ans ☒ 1. Shashi Tharoor
☒ 2. Khushwant Singh
☒ 3. Rajdeep Sardesai
☒ 4. Arvind Adiga

Question ID : 54592721077

Q.2 Right to Information Act provides for setting out the practical regime of right to information for citizens to secure access to information under the control of (i) _____. It was passed in (ii) _____.

- Ans ☒ 1. (i) Public authorities, (ii) 2001
☒ 2. (i) Private Authorities, (ii) 2001
☒ 3. (i) Public authorities, (ii) 2005
☒ 4. (i) Private authorities, (ii) 2005

Question ID : 54592721084

Q.3 Which chronicles and documents from the Mughal court is the major source for the agrarian history of the sixteenth and early seventeenth century ?

- Ans ☒ 1. Ain-I-Akbari
☒ 2. Kitab-ul-Hind
☒ 3. Babur Nama
☒ 4. Humayunama

Question ID : 54592721075

Q.4 This brilliant Indian scientist was a plant physiologist as well as a physicist. His books include "Response in the Living and Non-Living" (1902) and "The Nervous Mechanism of Plants" (1926). Identify the person and identify his invention by choosing the correct option.

- Ans ☒ 1. Meghnad Saha, Short Radio Waves
☒ 2. Jagdish Chandra Bose, Crescograph
☒ 3. C. V. Raman, Raman Effect
☒ 4. Satyendra Nath Bose, God Particles

Question ID : 54592721080

Q.5 This is a multi-country organization that has 10 member states and was formed in the year 1967. Which of the following organizations can it be?

- Ans ☒ 1. SCO
☒ 2. SAARC
☒ 3. APEC
☒ 4. ASEAN

Question ID : 54592721078

Q.6 Which of the following was a work not done by the jotedars during the eighteenth century British administration?

- Ans
- ☐ 1. exercised direct control over a considerable section of poor villagers
 - ☒ 2. distributing the revenue demand (jama) over villages
 - ☐ 3. revolted against the zamindars many times
 - ☐ 4. controlled local trade as well as moneylending to ryots

Question ID : 54592721072

Q.7 Which of the following personalities is not matched with the position they are holding?

- Ans
- ☐ 1. Sooronbay Jeenbekov - President of Kyrgyzstan
 - ☒ 2. Mauricio Macri - Australian Prime Minister
 - ☐ 3. Moon Jae-in - South Korean President
 - ☐ 4. Lotay Tshering - Bhutanese Prime Minister

Question ID : 54592721076

Q.8 Which of the following comes under Right to Freedom?

- Ans
- ☐ 1. Prohibition of employment of children in hazardous jobs
 - ☒ 2. Protection of Right to form associations/unions
 - ☐ 3. Protection of language, culture of minorities
 - ☐ 4. Right to move the courts to issue directions/orders/writs for enforcement of rights

Question ID : 54592721082

Q.9 "We must make our political democracy a social democracy as well." Who had said this line?

- Ans
- ☐ 1. Maulana Abul Kalam Azad
 - ☐ 2. Pandit Jawaharlal Nehru
 - ☒ 3. B.R. Ambedkar
 - ☐ 4. Dr. Rajendra Prasad

Question ID : 54592721085

Q.10 In the 2019 edition of this tournament, Rafael Nadal won the Men's Singles title and Ashleigh Barty won the Women's Singles title. Which tournament is being described?

- Ans
- ☐ 1. Wimbledon
 - ☒ 2. French Open
 - ☐ 3. Australian Open
 - ☐ 4. US Open

Question ID : 54592721086

Q.11 Which of the following movements and their respective years are not correctly matched?

- Ans
- ☐ 1. Rowlatt Satyagraha - 1919
 - ☒ 2. Kheda Satyagraha - 1920
 - ☐ 3. Champaran Satyagraha : 1916-17

 4. Ahmedabad Mill Strike Satyagraha - 1918





Question ID : 54592721073

Q.12 Which Constitutional Amendment fixed the norm that the total number of Ministers, including the Prime Minister, in the Council of Ministers shall not exceed fifteen per cent of the total number of members of the House of the People?

- Ans  1. 85th Amendment Act
-  2. 91st Amendment Act
-  3. 96th Amendment Act
-  4. 89th Amendment Act





Question ID : 54592721083

Q.13 Choose the incorrect statement about the NITI Aayog:

- Ans  1. It was formed in the year 2015.
-  2. There are 5 ex-officio members in the NITI Aayog.
-  3. The NITI Aayog is neither a statutory body nor a constitutional body.
-  4. At the core of NITI Aayog's creation are two hubs – Team India Hub and the Knowledge and Innovation Hub.

Question ID : 54592721079

Q.14 Choose the incorrect statement with regards to the Indus Valley Civilization:

- Ans  1. The Indus Valley seals conveyed the identity of the sender and also if the bag with the sealing was intact
-  2. Beads were made of carnelian which were pink coloured stones obtained by firing the yellowish raw material
-  3. The longest inscription in the Indus Valley era has about 26 symbols
-  4. The Indus Valley people used weights both in binary and decimal systems

Question ID : 54592721070

Q.15 The last edition of a multi-sport event was held in 2018 at the Gold Coast and the next edition will be held in 2022 at Birmingham. Identify which multi-sport events is being talked about?

- Ans  1. World Games
-  2. Commonwealth Games
-  3. Asian Games
-  4. Diamond League

Question ID : 54592721088

Q.16 Which state topped the rankings in the Khelo India Youth Games 2019?

- Ans  1. Delhi
-  2. Karnataka
-  3. Haryana
-  4. Maharashtra

Question ID : 54592721087

Q.17 "What if I and all the eminent leaders in Gujarat and in the rest of the country are arrested? This movement is based on the faith that when a whole nation is roused and on the march no leader is necessary." Who said this and which movement did this quote precede?

- Ans
- ☒ 1. Sardar Vallabhbhai Patel, Non-Cooperation Movement
 - ☒ 2. Mahatma Gandhi, Civil Disobedience Movement
 - ☒ 3. Mahatma Gandhi, Dandi March
 - ☒ 4. Sardar Vallabhbhai Patel, Civil Disobedience Movement

Question ID : 54592721074

Q.18 Which of the following places of the sixth century BC are presently not situated in India?

- Ans
- ☒ 1. Kaushambi
 - ☒ 2. Rajgir
 - ☒ 3. Ujjayini
 - ☒ 4. Taxila

Question ID : 54592721071

Q.19 Which of the following factors does not affect the ocean salinity directly?

- Ans
- ☒ 1. Coriolis Force
 - ☒ 2. Winds
 - ☒ 3. Evaporation and precipitation
 - ☒ 4. Fresh water flow from rivers

Question ID : 54592721069

Q.20 Sahitya Akademi has selected _____ writers for Yuva Puraskar 2019.

- Ans
- ☒ 1. 21
 - ☒ 2. 20
 - ☒ 3. 23
 - ☒ 4. 22

Question ID : 54592721081

Section : Arithmetic Ability1

Q.1 Find the largest of the following fractions?

$$\frac{2}{9}, \frac{14}{16}, \frac{23}{21}, \frac{63}{69}, \frac{19}{37}$$

- Ans
- ☒ 1. $\frac{23}{21}$
 - ☒ 2. $\frac{19}{17}$

☒ 3. $\frac{63}{69}$

☒ 4. $\frac{14}{16}$

Question ID : 54592721092

Q.2 15 kg grapes which contain 90 percent water were kept in sunlight. In presence of sunlight, the content of water reduces to 85 percent due to evaporation. Find the reduced weight of grapes?

- Ans ☒ 1. 10 kg
☒ 2. 13 kg
☒ 3. 14 kg
☒ 4. 12 kg

Question ID : 54592721103

Q.3 If $A = 1 \times 2 \times 3 \times \dots \times 200$ and $B = 201 \times 202 \times 203 \times 204$, then find the LCM of A and B.

- Ans ☒ 1. 201 A
☒ 2. A
☒ 3. B
☒ 4. AB

Question ID : 54592721096

Q.4 The average salary of all the employees in a company is Rs.10500. The average salary of all the male employees Rs.15000. The average salary of all the female employees is Rs.8500. If there are 36 male employees in the company. What is the total number of employees in the company?

- Ans ☒ 1. 104
☒ 2. 65
☒ 3. 81
☒ 4. 117

Question ID : 54592721101

Q.5 HCF of (63, 84, 147) is:

- Ans ☒ 1. 7
☒ 2. 23
☒ 3. 21
☒ 4. 12

Question ID : 54592721095

Q.6 DIRECTIONS: What should come in place of the question mark (?) in the following questions?

25 percent of 84 \times 25 percent of 84 = ?

- Ans ☒ 1. 441

☐ 2. 424

☐ 3. 482

☐ 4. 488

Question ID : 54592721090

Q.7 What should come in place of the question mark (?) in the following question?

$$16 + \frac{3}{4} \text{ of } [32 - 16 \div 4 \times 6 + \overline{23 - 11} + 3 - 2 \times 6] = ?$$

Ans

☒ 1. $\frac{97}{4}$

☐ 2. $\frac{77}{4}$

☐ 3. $\frac{81}{4}$

☐ 4. $\frac{89}{4}$

Question ID : 54592721094

Q.8 The number 11111111111 is divisible by:

Ans

☐ 1. 5 and 11

☐ 2. 3 and 9

☐ 3. 9 and 11

☒ 4. 3 and 11

Question ID : 54592721098

Q.9 When the sum of the digits of a number is subtracted from the number, the result will be always divisible by:

Ans

☐ 1. 6

☒ 2. 9

☐ 3. 111

☐ 4. 5

Question ID : 54592721097

Q.10 A shopkeeper offers a discount of K percent on a product A and (K + 15) percent on product B. The marked price of A and B is same. If the ratio of the selling price of B to that of A is 13 : 16, then find the discount percentage of product A.

Ans

☐ 1. 15 percent

☐ 2. 22 percent

☒ 3. 20 percent

☐ 4. 25 percent

Question ID : 54592721099

Q.11

There are two numbers such that 25% of the first number is equal to the square of the second number. The second number is $4\frac{4}{17}$ % of 850. What is the difference between two numbers ?

- Ans
- ☒ 1. 5148
 - ☐ 2. 3642
 - ☐ 3. 4096
 - ☐ 4. 6658

Question ID : 54592721104

Q.12 What should come in place of the question mark (?) in the following question?

$$\frac{15}{2} + \frac{-11}{3} + 6 + \frac{-7}{6} = ?$$

- Ans
- ☒ 1. $\frac{26}{3}$
 - ☐ 2. $\frac{15}{6}$
 - ☐ 3. $\frac{12}{19}$
 - ☐ 4. $\frac{27}{4}$

Question ID : 54592721091

Q.13 If (K + 2), (K + 6), (K + 23) and (K + 33) are in proportion. Find the value of (K + 10).

- Ans
- ☐ 1. 18
 - ☒ 2. 22
 - ☐ 3. 26
 - ☐ 4. 20

Question ID : 54592721108

Q.14 By selling 150 metre of cloth, I gain the selling price of 15 metre. Find the gain percent.

- Ans
- ☐ 1. 15 Percent
 - ☐ 2. 9.09 Percent
 - ☒ 3. 11.11 Percent
 - ☐ 4. 10 Percent

Question ID : 54592721105

Q.15 Five times the present age of Rukmani is equal to four times the age of Sukhmani. Five times the age of Mahima six years ago was equal to four times the age of Sukhmani five years ago. If the average of present age of Rukmani, Sukhmani and Mahima is 31 years. Find the age of Rukmani three years ago?

- Ans
- ☒ 1. 25 yr
 - ☐ 2. 22 yr

☐ 3. 28 yr

☐ 4. 35 yr

Question ID : 54592721100

Q.16 Deepak purchased a certain number of tables, with an expectation that if he sells all of the tables at the marked price, he will get a profit of 35 percent. But during transportation, 12 percent of the tables are completely damaged and gave him no returns, 15 percent are slightly damaged so he sells them at a discount of 20 percent. The remaining are sold at the marked price. What is his overall profit percentage ?

Ans ☒ 1. 14.75 Percent

☐ 2. 12.33 Percent

☐ 3. 16.5 Percent

☐ 4. 15.25 Percent

Question ID : 54592721106

Q.17 DIRECTIONS: What should come in place of the question mark (?) in the following question?

$$\frac{(598+178)^2 - (598-178)^2}{598 \times 178} = ?$$

Ans ☐ 1. 8

☒ 2. 4

☐ 3. 5

☐ 4. $\frac{1}{2}$

Question ID : 54592721089

Q.18 The cost price of a trouser is $\frac{5}{7}$ th of the cost price of a shirt. The shirt is sold at 24 percent profit and the total profit on one trouser and one shirt is 17 percent. If the profit earned on a shirt is Rs.504. What is the selling price of trouser?

Ans ☐ 1. Rs.1450

☒ 2. Rs.1608

☐ 3. Rs.1520

☐ 4. Rs.1716

Question ID : 54592721107

Q.19 A test consists of a total of 100 questions from three sections QA, LR and VA. All questions carry equal marks. QA section contains 35 questions, LR section contains 35 questions and VA section contains 30 questions. A student answered 60 percent from QA section, 40 percent from LR section and 50 percent from VA section correctly. Exactly how many more questions should he have answered correctly to get the pass percentage of 65 percent in the test ?

Ans ☐ 1. 19

☐ 2. 24

☐ 3. 20

☒ 4. 15

Question ID : 54592721102

Q.20 What should come in place of the question mark (?) in the following question?

$$[(16 \div 4) \times 4] \div 4 = ?$$

- Ans
- ☒ 1. 4
 - ☐ 2. 2
 - ☐ 3. 5
 - ☐ 4. 3

Question ID : 54592721093

Section : Arithmetic Ability2

Q.1 Find the area of a triangle whose sides are 12 cm, 16 cm and 20 cm.

- Ans
- ☐ 1. 108 cm²
 - ☐ 2. 72 cm²
 - ☒ 3. 96 cm².
 - ☐ 4. 144 cm²

Question ID : 54592721122

Q.2 A wall of 36 metre long, 32 metre wide and 28 meter high is made up of $1 \times 2 \times 3$ bricks. If a window occupies $1/8$ th of the volume of the wall, find the number of bricks?

- Ans
- ☐ 1. 4605
 - ☒ 2. 4704
 - ☐ 3. 4830
 - ☐ 4. 4250

Question ID : 54592721121

Q.3 Walking as $2/5$ of his usual speed, a man boy reaches his office 10 minute late. Find his usual time./

- Ans
- ☐ 1. 16 minutes
 - ☐ 2. 12 minutes
 - ☒ 3. 15 minutes
 - ☐ 4. 20 minutes

Question ID : 54592721114

Q.4 The simple interest on a certain sum for 7 months at 4 percent per annum is Rs. 124 less than the simple interest on the same sum for 15 months at 6 percent per annum. The sum is:

- Ans
- ☐ 1. Rs. 2,560
 - ☐ 2. Rs. 3,300
 - ☒ 3. Rs. 2,400
 - ☐ 4. Rs. 2,680

Question ID : 54592721112

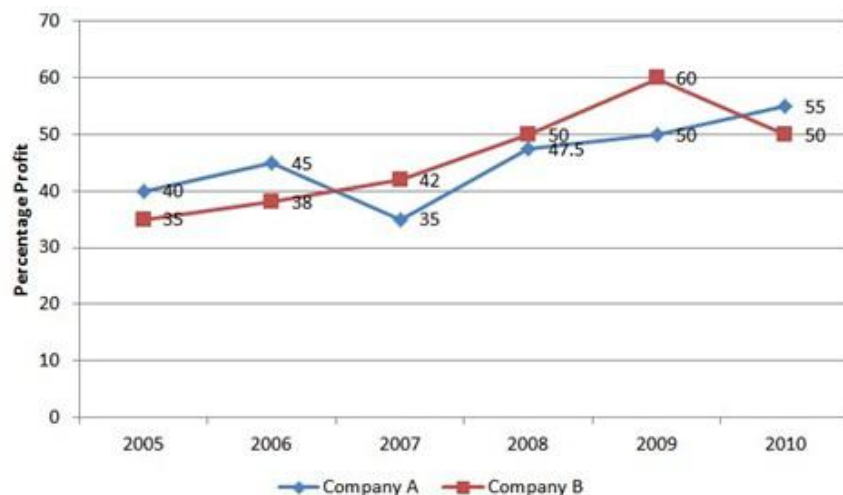
Q.5 A train passes a 360 metre long platform in 40 seconds and a man standing on the platform in 16 seconds. The speed of the train is:

- Ans
- ☒ 1. 40 kmph
 - ☒ 2. 50 kmph
 - ☒ 3. 38 kmph
 - ☒ 4. 54 kmph

Question ID : 54592721116

Q.6 DIRECTIONS: Study the following graph carefully to answer the questions:

Percent Profit Earned by Two Companies Over the Years Percent profit
= (Income-Expenditure)x100/Expenditure



If the income of company A in the year 2006 was 6.425 lakh, what was its expenditure in that year?

- Ans
- ☒ 1. 4.5 lakh.
 - ☒ 2. 5.2 lakh.
 - ☒ 3. 4.43 lakh.
 - ☒ 4. 4.7 lakh.

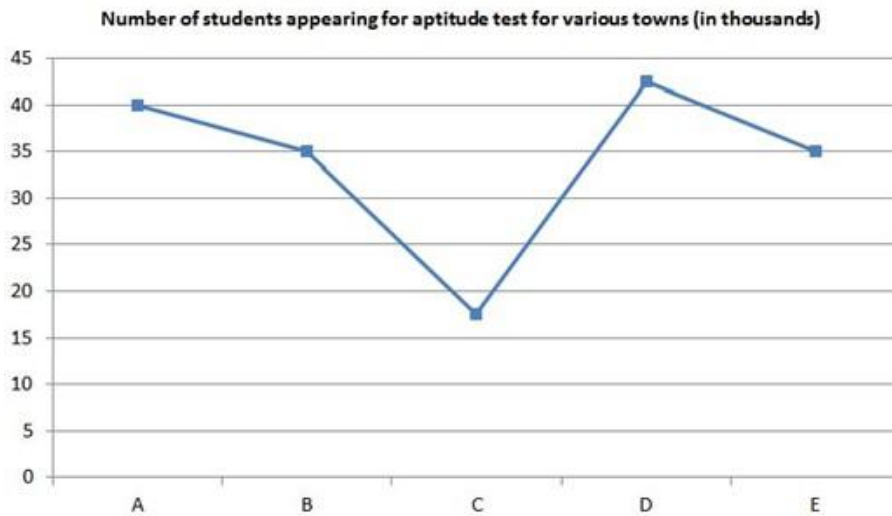
Question ID : 54592721126

Q.7 12 men can complete a work in 10 days. 25 women can complete the same work in 6 days. In how many days 8 men and 4 women can complete the same work, working together?

- Ans
- ☒ 1. $10\frac{5}{7}$ days
 - ☒ 2. $2\frac{3}{7}$ days
 - ☒ 3. $4\frac{3}{7}$ days
 - ☒ 4. $8\frac{5}{7}$ days

Question ID : 54592721119

Q.8 DIRECTIONS: Study the following Graph carefully and answer the questions given below:



What is the respective ratio of the number of students appearing for the Aptitude test from Town C and D together to the number of students appearing for the Aptitude test from Town A, D and E together?

- Ans ☒ 1. 24 : 47
☒ 2. 20 : 43
☒ 3. 20 : 47
☒ 4. 11 : 13

Question ID : 54592721128

Q.9 DIRECTIONS: Given below is the information about the weight, colours, and size of toy bears in a toy shop. Refer to the table below and answer the questions that follow:

Weight (kg)		Bear in stock, by size and colour			
Small	Large		Brown	Blue	White
2	3	Small	5	10	12
		Large	6	8	4

What is the ratio of the weight of blue bears to that of white bears?

- Ans ☒ 1. 3 : 4
☒ 2. 4 : 3
☒ 3. 11 : 9
☒ 4. 9 : 11

Question ID : 54592721125

Q.10 Each side of a cube is 8 units. It is cut into cubes each of side 4 unit. The total surface area of all the smaller cubes thus obtained is :

- Ans ☒ 1. 560 square units
☒ 2. 456 square units
☒ 3. 768 square units
☒ 4. 372 square units





Question ID : 54592721120

Q.11 Income of Akhil and Nikhil is in the ratio 6 : 7. The ratio of their expenses is 9 : 11. If both of them save the same amount. Find the ratio of income to expenditure of Nikhil.

- Ans  1. 4 : 3
-  2. 14 : 11
-  3. 8 : 5
-  4. 5 : 6

Question ID : 54592721109

Q.12 Two pipes A and B can fill a cistern in 9 minutes and 6 minutes respectively. Both the pipes are turned on simultaneously. When should the second pipe be closed, if the cistern is to be filled in 4 minutes?

- Ans  1. 6 min
-  2. 3 min
-  3. 4 min
-  4. 2 min

Question ID : 54592721117

Q.13 A company wants to share profit among managers, supervisors and clerks in the ratio 4 : 3 : 2. There are 8 managers, 12 supervisors and 20 clerks in the company. Each manager got a share of Rs. 25000. Find the sum of the amount received by a supervisor and a clerk.

- Ans  1. Rs. 21000
-  2. Rs. 16400
-  3. Rs. 19200
-  4. Rs. 17500

Question ID : 54592721110

Q.14 A sum of Rs.42000 is lent out in two parts in such a way that the compound interest on the first part in two years at the rate of 12.5 percent per annum compounded annually is Rs.6375. Find the interest on other part for two years at the rate of 6.5 percent per annum on simple interest.

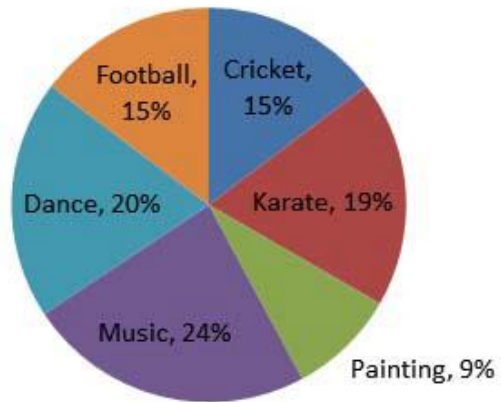
- Ans  1. Rs.2650
-  2. Rs.2340
-  3. Rs.2120
-  4. Rs.2700

Question ID : 54592721113

Q.15 DIRECTIONS: Study the following Pie-chart carefully to answer these questions.

Total number of student = 8500

Percentage of student enrolled in different activities of school



How much more percent (approximately) number of students are there in dance as compared to the number of student in football?

- Ans
- ☒ 1. 33
 - ☐ 2. 43
 - ☐ 3. 49
 - ☐ 4. 29

Question ID : 54592721124

Q.16 The speed of a bike increases by 1 km/hr after every hour. If the distance travelled in the first one hour was 40 km, the total distance travelled in 8 hours was:

- Ans
- ☐ 1. 382 km
 - ☐ 2. 342 km
 - ☐ 3. 356 km
 - ☒ 4. 348 km

Question ID : 54592721115

Q.17 Study the following table and answer the questions given below:

Trade deficit 2001-2006

(All figures in Rs.crores)

Year	2001-02	2002-03	2003-04	2004-05	2005-06
Exports	34133	35680	34298	38258	44894
Imports	48948	51187	47587	47544	59264

Trade Deficit = Import - Export

$$TD\% = \frac{\text{Trade Deficit}}{\text{Export}} \times 100$$

Find the total trade deficit during the entire period.

- Ans
- ☐ 1. 72507
 - ☐ 2. 72563
 - ☐ 3. 75207
 - ☒ 4. 75063

Question ID : 54592721123

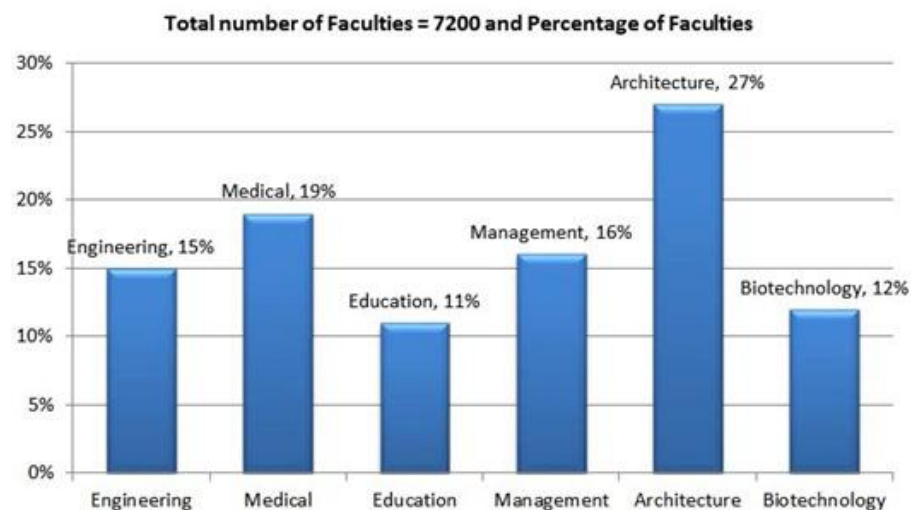
Q.18 A certain number of men can finish a piece of work in 50 days. If however, there were 4 men less, it would take 20 more days for the work to be finished. How many men were there originally?

- Ans
- ☒ 1. 18
 - ☒ 2. 14
 - ☒ 3. 15
 - ☒ 4. 16

Question ID : 54592721118

Q.19 DIRECTIONS: Study the following pie-chart and answer the following questions.

Percentage wise Distribution of faculty in six different Departments
Total number of Faculties = 7200
Percentage of Faculties



One-third of the number of faculty of Architecture department has left. What is the number of remaining faculty in Architecture department?

- Ans
- ☒ 1. 1296
 - ☒ 2. 678
 - ☒ 3. 1248
 - ☒ 4. 648

Question ID : 54592721127

Q.20 The compound interest accrued on Rs. 18000 in two years is Rs. 2995.2. What will be the simple interest accrued at the same rate of interest for the same sum for three years?

- Ans
- ☒ 1. Rs. 4320
 - ☒ 2. Rs. 4850
 - ☒ 3. Rs. 5220
 - ☒ 4. Rs. 5480

Question ID : 54592721111

Q.1 Arrange the jumbled sentences to make a meaningful paragraph.

A. For Nespresso, delivering a consistently perfect cup of coffee meant creating a capsule system for people at home.

B. Each one needed a casing that was protective, durable, and airtight enough to ensure that the coffee inside stayed as fresh.

C. Aluminum is a material that met the challenge because it allows every capsule to be hermetically sealed, locking in that coffee aroma.

D. Aluminum's low density, light weight and malleability make it one of the most useful metals in industry today.

- Ans
- ☐ 1. ABDC
 - ☐ 2. CDAB
 - ☒ 3. ABCD
 - ☐ 4. DABC

Question ID : 54592721148

Q.2 Select the most appropriate option to substitute the underlined segment in the given sentence. If there is no need to substitute it, select option No substitution required .

Freshwater environments, from creeks to rivers, have more than 10,000 species of fish, we might never get the chance to see.

- Ans
- ☐ 1. we might not having
 - ☒ 2. we may never get
 - ☐ 3. No substitution required
 - ☐ 4. We may didn't have

Question ID : 54592721135

Q.3 Select the most appropriate option to substitute the underlined segment in the given sentence. If there is no need to substitute it, select option No substitution required .

It was the summer of 1994, and he was doing research on the ecology of Yellowstone Lake.

- Ans
- ☐ 1. will be doing
 - ☒ 2. No substitution required
 - ☐ 3. was done
 - ☐ 4. will do

Question ID : 54592721134

Q.4 Select the most appropriate word to fill in the blank.

Wolves are among our planet's best-studied animals, yet _____ habits have remained relatively mysterious.





- Ans
- ☐ 1. they're
 - ☒ 2. their
 - ☐ 3. they had

 4. there

Question ID : 54592721140

Q.5 Select the most appropriate word to fill in the blank.





They've been called "rats with tails, the humble eastern gray squirrel is finally _____ sometime in the spotlight.

- Ans**
-  1. get
 -  2. going to
 -  3. have got
 -  4. getting

Question ID : 54592721142

Q.6 Select the most appropriate option to substitute the underlined segment in the given sentence. If there is no need to substitute it, select option No substitution required .

The world's largest aquarium is a little quiet this afternoon, with the changing tide limiting visibility to less than 30 feet.

- Ans**
-  1. the changing tide limited
 -  2. No substitution required
 -  3. a changed tide limiting
 -  4. the changed tide limited

Question ID : 54592721138

Q.7 Select the most appropriate word to fill in the blank.




The bottom surface of the sea ice is a thick slurry of floating ice crystals, and my descent _____ them in motion.

- Ans**
-  1. had set
 -  2. has setting
 -  3. has set
 -  4. have set

Question ID : 54592721146

Q.8 The following sentence has been divided into three parts. One of them may be incorrect. Choose the INCORRECT part from the given options. If you don't find any error, mark 'No error' as your answer.

Planetary scientists use solstices and equinoxes / to defining 'seasons' for / other planets in our solar system.

- Ans**
-  1. Planetary scientists use solstices and equinoxes
 -  2. No Error
 -  3. other planets in our solar system.

✓ 4. to defining 'seasons' for

Question ID : 54592721130

Q.9 The following sentence has been divided into three parts. One of them may be incorrect. Choose the INCORRECT part from the given options. If you don't find any error, mark 'No error' as your answer.

Creativity is contagious, / and the Your Shot photo community/ spreads it every day.

- Ans
- ✓ 1. No Error
 - ✗ 2. Creativity is contagious
 - ✗ 3. spreads it every day.
 - ✗ 4. and the Your Shot photo community

Question ID : 54592721129

Q.10 Arrange the jumbled sentences to make a meaningful paragraph.

- A. Self-portraits have a long history in the art world.
- B. Since 2014, the United States has celebrated June 21 as National Selfie Day to honor this distinctive style.
- C. With the rise of smartphones, selfies captured by cameras rather than paint have become increasingly popular.
- D. What do you do when nobody is around to take your picture? You take a selfie.

- Ans
- ✓ 1. DACB
 - ✗ 2. DCBA
 - ✗ 3. BDCA
 - ✗ 4. ABCD

Question ID : 54592721147

Q.11 Select the most appropriate option to substitute the underlined segment in the given sentence. If there is no need to substitute it, select option No substitution required .

Many biologists suggest that it was time to removed the Yellowstone grizzly bear from the list of threatened species.

- Ans
- ✓ 1. it is time to remove
 - ✗ 2. No substitution required
 - ✗ 3. it was time to remove
 - ✗ 4. it was remove

Question ID : 54592721136

Q.12 The following sentence has been divided into three parts. One of them may be incorrect. Choose the INCORRECT part from the given options. If you don't find any error, mark 'No error' as your answer.

Each year the squirrels hoard seeds and nuts / in various places, using their excellent / sense in smell to locate the food.

- Ans
- ✓ 1. sense in smell to locate the food.
 - ✗ 2. in various places, using their excellent

- ☒ 3. Each year the squirrels hoard seeds and nuts
☒ 4. No Error

Question ID : 54592721133

Q.13 Select the most appropriate option to substitute the underlined segment in the given sentence. If there is no need to substitute it, select option No substitution required .

Researchers have found that wolves is far more flexible then most people had realized.

- Ans ☒ 1. is much flexible to
☒ 2. is more flexible then
☒ 3. are far more flexible than
☒ 4. No substitution required

Question ID : 54592721137

Q.14 Select the most appropriate word to fill in the blank.

The glaciers in the Himalaya are much less studied than Greenland's _____ it is amongst the most dangerous regions.

- Ans ☒ 1. because
☒ 2. alike
☒ 3. however
☒ 4. yet

Question ID : 54592721145

Q.15 The following sentence has been divided into three parts. One of them may be incorrect. Choose the INCORRECT part from the given options. If you don't find any error, mark 'No error' as your answer.

In case the ability to glide between / trees isn't cool enough, under ultraviolet light, / flying squirrels fur glows pink.

- Ans ☒ 1. In case the ability to glide between
☒ 2. trees isn't cool enough, under ultraviolet light
☒ 3. flying squirrels fur glows pink.
☒ 4. No Error

Question ID : 54592721131

Q.16 Select the most appropriate word to fill in the blank.

_____ the number of fish decline, there will be fewer opportunities to go fishing in the lake.

- Ans ☒ 1. Because
☒ 2. As
☒ 3. Although

 4. Yet

Question ID : 54592721139

Q.17 The following sentence has been divided into three parts. One of them may be incorrect. Choose the INCORRECT part from the given options. If you don't find any error, mark 'No error' as your answer.

On a trip to the forests of southern India, / I was stunning to see massive / rodents leaping treetop to treetop.

Ans  1. rodents leaping from treetop to treetop.

 2. On a trip to the forests of southern India,

 3. No Error

 4. I was stunning to see massive

Question ID : 54592721132

Q.18 Select the most appropriate word to fill in the blank.

It's hard to believe that the red wolves and gray wolves are still _____: as they were thought to be extinct.

Ans  1. being

 2. around

 3. thrive

 4. upon

Question ID : 54592721141


Q.19 Select the most appropriate word to fill in the blank.

Aluminum's low density, light weight and malleability _____ it one of the most useful metals _____ industry today.

Ans  1. make, in

 2. make, into

 3. makes, in

 4. makes, of

Question ID : 54592721144

Q.20 Select the most appropriate word to fill in the blank.

In November 2018, regional authorities opened an investigation _____ the illegal capture of marine mammals.

Ans  1. in

 2. into

 3. of

 4. to

Question ID : 54592721143

Section : General English2

Q.1 Select the meaning of the given idiom.

Spill the beans

- Ans ☒ 1. To reveal a secret
☐ 2. Lacking in support
☐ 3. Waste money
☐ 4. To be idle

Question ID : 54592721159

Q.2 Select the most appropriate synonym of the given word.

Mansion

- Ans ☐ 1. Domicile
☒ 2. A large impressive house
☐ 3. Plantation
☐ 4. Fortress

Question ID : 54592721152

Q.3 Select the wrongly spelt word.

- Ans ☐ 1. Obstacle
☐ 2. Innocence
☐ 3. Extension
☒ 4. Apperence

Question ID : 54592721157

Q.4 Select the word which means the same as the group of words given.

A child born after the death of its father

- Ans ☒ 1. Posthumous
☐ 2. Theist
☐ 3. Notorious
☐ 4. Pedestrian

Question ID : 54592721163

Q.5 Select the wrongly spelt word.

- Ans ☒ 1. Hygeine
☐ 2. Illustrate

- ☒ 3. Arousing
- ☒ 4. Gymnasium

Question ID : 54592721156

Q.6 Select the meaning of the given idiom.

To have a sweet tooth

- Ans
- ☒ 1. Lacking courage
 - ☒ 2. Preference for sugary foods
 - ☒ 3. To be insincere
 - ☒ 4. To experience pain while eating

Question ID : 54592721158

Q.7 Select the correct pair of homophones to fill in the blanks.

The stained glass windows behind the _____ in Glenn Church are in need of repair.

Genetic screening has the potential to _____ the genetic composition of the population.

- Ans
- ☒ 1. alter, altar
 - ☒ 2. altar, alter
 - ☒ 3. alter, alter
 - ☒ 4. altar, altar

Question ID : 54592721154

Q.8 Select the meaning of the given idiom.

Call it a day

- Ans
- ☒ 1. Take a chance
 - ☒ 2. Be unfair
 - ☒ 3. To stop working
 - ☒ 4. To postpone

Question ID : 54592721160

Q.9 Select the most appropriate antonym of the given word.

Mischievous

- Ans
- ☒ 1. Irksome
 - ☒ 2. Tricky
 - ☒ 3. Playful
 - ☒ 4. Obedient

Question ID : 54592721151

Q.10 Select the most appropriate synonym of the given word.

Resistance

- Ans  1. Comparison
 2. Refusal
 3. Merit
 4. Circumstance

Question ID : 54592721150

Q.11 Select the word which means the same as the group of words given.

Impossible to satisfy

- Ans  1. Vulnerable
 2. Potable
 3. Insatiable
 4. Opaque

Question ID : 54592721161

Q.12 Arrange the jumbled sentences to make a meaningful paragraph.

A. Yuri Gagarin, Alan Shepard, and Neil Armstrong - the first wave of space travelers—were trained astronauts thought to have the “right stuff” for risky missions.

B. But early spaceflight wasn’t the exclusive province of men – or even humans.





C. More than three years before Gagarin became the first human in space, the soviets sent up a stray dog.

D. Fruit flies, monkeys, mice, dogs, rabbits, and rats flew into space before humans.

- Ans  1. ABDC
 2. ADBC
 3. ADCB
 4. ABCD

Question ID : 54592721149

Q.13 Select the wrongly spelt word.

- Ans  1. Endeavour
 2. Competition
 3. Elimnate
 4. Absence

Question ID : 54592721155

Q.14 Select the word which means the same as the group of words given.

A person or thing living or existing at the same time as another.

- Ans  1. Cynic
 2. Predator

 3. Fanatic

 4. Contemporary

Question ID : 54592721162

Q.15 Select the most appropriate antonym of the given word.

Harmony

Ans  1. Ecstasy

 2. Rapport

 3. Kinship

 4. Discord

Question ID : 54592721153

Comprehension:

Read the given passage and answer the questions that follow.

Technology has impacted almost every aspect of life today, and education is no exception. Or is it? In some ways, education seems much the same as it has been for many years. A 14th century illustration by Laurentius de Voltolina depicts a university lecture in medieval Italy. The scene is easily recognizable because of its parallels to the modern day. The teacher lectures from a podium at the front of the room while the students sit in rows and listen. Some of the students have books open in front of them and appear to be following along. A few look bored. Some are talking to their neighbours. One appears to be sleeping. Classrooms today do not look much different, though you might find modern students looking at their laptops, tablets, or smart phones instead of books (though probably open to Facebook). A cynic would say that technology has done nothing to change education.


However, in many ways, technology has profoundly changed education. For one, technology has greatly expanded access to education. In medieval times, books were rare and only an elite few had access to educational opportunities. Individuals had to travel to centres of learning to get an education. Today, massive amounts of information (books, audio, images, videos) are available at one's fingertips through the Internet, and opportunities for formal learning are available online worldwide through the Khan Academy, MOOCs, podcasts, traditional online degree programs, and more. Access to learning opportunities today is unprecedented in scope thanks to technology.

Opportunities for communication and collaboration have also been expanded by technology. Traditionally, classrooms have been relatively isolated, and collaboration has been limited to other students in the same classroom or building. Today, technology enables forms of communication and collaboration undreamt of in the past. Students in a classroom in the rural U.S., for example, can learn about the Arctic by following the expedition of a team of scientists in the region, read scientists' blog posting, view photos, e-mail questions to the scientists, and even talk live with the scientists via a videoconference. Students can share what they are learning with students in other classrooms in other states who are tracking the same expedition. Students can collaborate on group projects using technology-based tools such as wikis and Google docs. The walls of the classrooms are no longer a barrier as technology enables new ways of learning, communicating, and working collaboratively.

SubQuestion No : 16

Q.16 Why does the author state that the walls of the classroom are no longer a barrier?

Ans  1. Students now take more responsibility for their own learning.

 2. Schools and universities across the country are beginning to redesign learning spaces to enable a new model of education.

 3. Technology has changed the roles of teachers and learners.

 4. As technology has enabled new ways of learning, communicating, and working collaboratively.

Comprehension:

Read the given passage and answer the questions that follow.

Technology has impacted almost every aspect of life today, and education is no exception. Or is it? In some ways, education seems much the same as it has been for many years. A 14th century illustration by Laurentius de Voltolina depicts a university lecture in medieval Italy. The scene is easily recognizable because of its parallels to the modern day. The teacher lectures from a podium at the front of the room while the students sit in rows and listen. Some of the students have books open in front of them and appear to be following along. A few look bored. Some are talking to their neighbours. One appears to be sleeping. Classrooms today do not look much different, though you might find modern students looking at their laptops, tablets, or smart phones instead of books (though probably open to Facebook). A cynic would say that technology has done nothing to change education.

However, in many ways, technology has profoundly changed education. For one, technology has greatly expanded access to education. In medieval times, books were rare and only an elite few had access to educational opportunities. Individuals had to travel to centres of learning to get an education. Today, massive amounts of information (books, audio, images, videos) are available at one's fingertips through the Internet, and opportunities for formal learning are available online worldwide through the Khan Academy, MOOCs, podcasts, traditional online degree programs, and more. Access to learning opportunities today is unprecedented in scope thanks to technology.

Opportunities for communication and collaboration have also been expanded by technology. Traditionally, classrooms have been relatively isolated, and collaboration has been limited to other students in the same classroom or building. Today, technology enables forms of communication and collaboration undreamt of in the past. Students in a classroom in the rural U.S., for example, can learn about the Arctic by following the expedition of a team of scientists in the region, read scientists' blog posting, view photos, e-mail questions to the scientists, and even talk live with the scientists via a videoconference. Students can share what they are learning with students in other classrooms in other states who are tracking the same expedition. Students can collaborate on group projects using technology-based tools such as wikis and Google docs. The walls of the classrooms are no longer a barrier as technology enables new ways of learning, communicating, and working collaboratively.

SubQuestion No : 17

Q.17 From among the given options, choose the option that is most similar in meaning to the word 'isolated' as used in the 3rd paragraph 2nd line of the passage:

- Ans
- ☒ 1. Unattended
 - ☒ 2. Substituted
 - ☒ 3. Detached
 - ☒ 4. Cherished

Comprehension:

Read the given passage and answer the questions that follow.

Technology has impacted almost every aspect of life today, and education is no exception. Or is it? In some ways, education seems much the same as it has been for many years. A 14th century illustration by Laurentius de Voltolina depicts a university lecture in medieval Italy. The scene is easily recognizable because of its parallels to the modern day. The teacher lectures from a podium at the front of the room while the students sit in rows and listen. Some of the students have books open in front of them and appear to be following along. A few look bored. Some are talking to their neighbours. One appears to be sleeping. Classrooms today do not look much different, though you might find modern students looking at their laptops, tablets, or smart phones instead of books (though probably open to Facebook). A cynic would say that technology has done nothing to change education.

However, in many ways, technology has profoundly changed education. For one, technology has greatly expanded access to education. In medieval times, books were rare and only an elite few had access to educational opportunities. Individuals had to travel to centres of

learning to get an education. Today, massive amounts of information (books, audio, images, videos) are available at one's fingertips through the Internet, and opportunities for formal learning are available online worldwide through the Khan Academy, MOOCs, podcasts, traditional online degree programs, and more. Access to learning opportunities today is unprecedented in scope thanks to technology.

Opportunities for communication and collaboration have also been expanded by technology. Traditionally, classrooms have been relatively isolated, and collaboration has been limited to other students in the same classroom or building. Today, technology enables forms of communication and collaboration undreamt of in the past. Students in a classroom in the rural U.S., for example, can learn about the Arctic by following the expedition of a team of scientists in the region, read scientists' blog posting, view photos, e-mail questions to the scientists, and even talk live with the scientists via a videoconference. Students can share what they are learning with students in other classrooms in other states who are tracking the same expedition. Students can collaborate on group projects using technology-based tools such as wikis and Google docs. The walls of the classrooms are no longer a barrier as technology enables new ways of learning, communicating, and working collaboratively.

SubQuestion No : 18

Q.18 According to the author, a cynic would say that technology has done nothing to change education because:

- Ans
- ☒ 1. The teaching fraternity doesn't welcome any changes in the education sector.
 - ☒ 2. The classrooms today do not have any similarity with the classrooms in the past.
 - ☒ 3. The classrooms today do not have any similarity with the classrooms in the past and The teaching fraternity doesn't welcome any changes in the education sector.
 - ☒ 4. Classrooms today do not look much different from the way they were in the past.

Question ID : 54592721166

Comprehension:

Read the given passage and answer the questions that follow.

Technology has impacted almost every aspect of life today, and education is no exception. Or is it? In some ways, education seems much the same as it has been for many years. A 14th century illustration by Laurentius de Voltolina depicts a university lecture in medieval Italy. The scene is easily recognizable because of its parallels to the modern day. The teacher lectures from a podium at the front of the room while the students sit in rows and listen. Some of the students have books open in front of them and appear to be following along. A few look bored. Some are talking to their neighbours. One appears to be sleeping. Classrooms today do not look much different, though you might find modern students looking at their laptops, tablets, or smart phones instead of books (though probably open to Facebook). A cynic would say that technology has done nothing to change education.

However, in many ways, technology has profoundly changed education. For one, technology has greatly expanded access to education. In medieval times, books were rare and only an elite few had access to educational opportunities. Individuals had to travel to centres of learning to get an education. Today, massive amounts of information (books, audio, images, videos) are available at one's fingertips through the Internet, and opportunities for formal learning are available online worldwide through the Khan Academy, MOOCs, podcasts, traditional online degree programs, and more. Access to learning opportunities today is unprecedented in scope thanks to technology.

Opportunities for communication and collaboration have also been expanded by technology. Traditionally, classrooms have been relatively isolated, and collaboration has been limited to other students in the same classroom or building. Today, technology enables forms of communication and collaboration undreamt of in the past. Students in a classroom in the rural U.S., for example, can learn about the Arctic by following the expedition of a team of scientists in the region, read scientists' blog posting, view photos, e-mail questions to the scientists, and even talk live with the scientists via a videoconference. Students can share what they are learning with students in other classrooms in other states who are tracking the same expedition. Students can collaborate on group projects using technology-based tools such as wikis and Google docs. The walls of the classrooms are no longer a barrier as technology enables new ways of learning, communicating, and working collaboratively.

SubQuestion No : 19

Q.19 Which of the following statements is not true in the context of the passage?

- Ans**
- ☒ 1. Access to learning opportunities has increased.
 - ☒ 2. In medieval times too, many had access to educational opportunities.
 - ☒ 3. Technology has expanded access to education.
 - ☒ 4. Massive amounts of information is available to individuals at their fingertips.

Question ID : 54592721167

Comprehension:

Read the given passage and answer the questions that follow.

Technology has impacted almost every aspect of life today, and education is no exception. Or is it? In some ways, education seems much the same as it has been for many years. A 14th century illustration by Laurentius de Voltolina depicts a university lecture in medieval Italy. The scene is easily recognizable because of its parallels to the modern day. The teacher lectures from a podium at the front of the room while the students sit in rows and listen. Some of the students have books open in front of them and appear to be following along. A few look bored. Some are talking to their neighbours. One appears to be sleeping. Classrooms today do not look much different, though you might find modern students looking at their laptops, tablets, or smart phones instead of books (though probably open to Facebook). A cynic would say that technology has done nothing to change education.

However, in many ways, technology has profoundly changed education. For one, technology has greatly expanded access to education. In medieval times, books were rare and only an elite few had access to educational opportunities. Individuals had to travel to centres of learning to get an education. Today, massive amounts of information (books, audio, images, videos) are available at one's fingertips through the Internet, and opportunities for formal learning are available online worldwide through the Khan Academy, MOOCs, podcasts, traditional online degree programs, and more. Access to learning opportunities today is unprecedented in scope thanks to technology.

Opportunities for communication and collaboration have also been expanded by technology. Traditionally, classrooms have been relatively isolated, and collaboration has been limited to other students in the same classroom or building. Today, technology enables forms of communication and collaboration undreamt of in the past. Students in a classroom in the rural U.S., for example, can learn about the Arctic by following the expedition of a team of scientists in the region, read scientists' blog posting, view photos, e-mail questions to the scientists, and even talk live with the scientists via a videoconference. Students can share what they are learning with students in other classrooms in other states who are tracking the same expedition. Students can collaborate on group projects using technology-based tools such as wikis and Google docs. The walls of the classrooms are no longer a barrier as technology enables new ways of learning, communicating, and working collaboratively.

SubQuestion No : 20

Q.20 The given passage attempts to answer one of the following questions:

- Ans**
- ☒ 1. Is the education sector technologically dependent?
 - ☒ 2. Is technological changes a threat to education?
 - ☒ 3. Is technology needed in the domain of education?
 - ☒ 4. How has technology changed education?

Question ID : 54592721165

Q.1 निम्नलिखित में से किनके नाम प्रायः स्त्रीलिंग होते हैं?

- Ans
- ☒ 1. पेड़ों के नाम
 - ☒ 2. बोलियों के नाम
 - ☒ 3. सागरों के नाम
 - ☒ 4. फलों के नाम

Question ID : 54592721185

Q.2 सक्रिय व्यक्ति जीवन में नाम कमाता है, परन्तु _____ असफल हो जाता है।

- Ans
- ☒ 1. निष्क्रिय
 - ☒ 2. आलसी
 - ☒ 3. कर्मठ
 - ☒ 4. अकर्मण्य

Question ID : 54592721184

Q.3 निम्न में से 'अवनि' का विलोम शब्द क्या होगा ?

- Ans
- ☒ 1. मोक्ष
 - ☒ 2. कोप
 - ☒ 3. शहर
 - ☒ 4. अंबर

Question ID : 54592721176

Q.4 निम्नलिखित वाक्यों में से किसमें पूर्वकालिक क्रिया नहीं है?

- Ans
- ☒ 1. वह खाना खाता है।
 - ☒ 2. वह विद्यालय जाता है।
 - ☒ 3. दाल में घी डाल देना।
 - ☒ 4. वह लेटकर खाता है।

Question ID : 54592721173

Q.5 निम्नलिखित शब्दों में से कौन-सा शब्द जातिवाचक संज्ञा को दर्शाता है।

- Ans
- ☒ 1. नदी
 - ☒ 2. जर्सी गाय
 - ☒ 3. बचपन
 - ☒ 4. तेल

Question ID : 54592721172

Q.6 निम्न शब्दों में से शुद्ध शब्द का चयन कीजिए।

- Ans
- ☒ 1. प्रर्चाय
 - ☒ 2. आर्शीवाद
 - ☒ 3. स्वर्गीय
 - ☒ 4. असमर्थ

Question ID : 54592721178

Q.7 निम्नलिखित शब्दों में से तद्धव शब्द का चयन कीजिए।

- Ans ☒ 1. आग
☒ 2. कर्ण
☒ 3. चन्द्र
☒ 4. ग्राम

Question ID : 54592721170

Q.8 निम्न वाक्यांश के लिए एक शब्द का चयन कीजिए-
मर्यादा का उल्लंघन करके किया हुआ-

- Ans ☒ 1. अत्तरा
☒ 2. अनुरंजक
☒ 3. अटारी
☒ 4. अतिकृत

Question ID : 54592721183

Q.9 शब्द 'समानाधिकार' का सन्धि विच्छेद क्या होगा?

- Ans ☒ 1. समान + अधिकार
☒ 2. समाधि + कार
☒ 3. सम+ अधिकार
☒ 4. सम् + मानअधिकार

Question ID : 54592721171

Q.10 हिमांशु का पर्यायवाची शब्द है-

- Ans ☒ 1. कपीश्वर
☒ 2. कलकंठ
☒ 3. उत्कृष्ट
☒ 4. रत्नाकार

Question ID : 54592721175

Q.11 वाक्य 'मुझसे बोझ उठाया नहीं जा सकता' का कर्तृवाच्य क्या होगा?

- Ans ☒ 1. मुझसे बोझ उठाया नहीं जा सकता
☒ 2. मैं बोझ नहीं उठा सकता।
☒ 3. मैं बोझ नहीं उठाना चाहता।
☒ 4. मेरे द्वारा बोझ नहीं उठाया जा सकता।

Question ID : 54592721189

Q.12 किस वाक्य में वचन का सही प्रयोग हुआ है?

- Ans ☒ 1. मेरे होश उड़ गए।
☒ 2. मैं होश उड़ गया।

- ☒ 3. मेरी होश उड़ गई।
☒ 4. हमारे होश उड़ गई।

Question ID : 54592721186

Q.13 'पृच्छक' का अर्थ है-

- Ans ☒ 1. पृष्ठ देने वाला
☒ 2. इच्छा करने वाला
☒ 3. प्रश्न बनाने वाला
☒ 4. प्रश्न पूछने वाला

Question ID : 54592721180

Q.14 जिस क्रिया का फल कर्ता पर न पड़कर कर्म पर पड़े, उसे _____ कहते हैं।

- Ans ☒ 1. वाक्य
☒ 2. सकर्मक क्रिया
☒ 3. काल
☒ 4. अकर्मक क्रिया

Question ID : 54592721179

Q.15 'पूर्णवर्तमान काल' को ही _____ कहा जाता है।

- Ans ☒ 1. आसन्न भूत
☒ 2. भविष्य काल
☒ 3. सामान्य भूत
☒ 4. सामान्य वर्तमान

Question ID : 54592721188

Q.16 निम्नलिखित शब्द-युग्म के सही अर्थ-भेद का चयन कीजिए-
'अनिल-अनल'

- Ans ☒ 1. जंगल-आग
☒ 2. हवा-आग
☒ 3. आग-हवा
☒ 4. हवा-पानी

Question ID : 54592721181

Q.17 वाक्य में शब्द का सम्बंध किससे होता है?

- Ans ☒ 1. कारक
☒ 2. भेद
☒ 3. लिंग
☒ 4. वचन

Question ID : 54592721187

Q.18 उपसर्ग शब्द की व्युत्पत्ति है-

- Ans
- ☒ 1. उपर्स + ग
 - ☒ 2. उ+पसर्ग
 - ☒ 3. उपस+र्ग
 - ☒ 4. उप+सर्ग

Question ID : 54592721174

Q.19 निम्न वाक्यांश के लिए एक शब्द का चयन कीजिए-
जिसे किसी का डर न हो -

- Ans
- ☒ 1. निः शंक
 - ☒ 2. निर्भीक
 - ☒ 3. निर्लज्ज
 - ☒ 4. निश्छल

Question ID : 54592721177

Q.20 निम्नलिखित प्रश्न में शुद्ध वर्तनी वाले शब्द का चयन कीजिए-

- Ans
- ☒ 1. अमावस्या
 - ☒ 2. अमावश्या
 - ☒ 3. अमीवश्या
 - ☒ 4. आमावस्या

Question ID : 54592721182

Section : General Hindi2

Q.1 पूर्ण विराम के बाद सर्वाधिक प्रयुक्त होने वाला विराम-चिह्न _____ है।

- Ans
- ☒ 1. विस्मयादिबोधक
 - ☒ 2. अर्द्धविराम
 - ☒ 3. प्रश्नवाचक
 - ☒ 4. अल्पविराम

Question ID : 54592721199

Q.2 मुझे शब्द किस प्रकार का सर्वनाम है?

- Ans
- ☒ 1. उत्तमपुरुष
 - ☒ 2. कृतवाच्यपुरुष
 - ☒ 3. मध्यमपुरुष
 - ☒ 4. अन्यपुरुष

Question ID : 54592721195

Q.3 'काबुल में क्या गधे नहीं होते' लोकोक्ति का अर्थ क्या है?

- Ans
- ☒ 1. धोखे का व्यापार बार-बार नहीं होता है।
 - ☒ 2. प्रसिद्ध तो ज्यादा:परन्तु योग्यता कुछ नहीं

 3. काबुल में गधे नहीं पाये जाते है।

 4. अच्छे-बुरे सभी जगह होते हैं।

Question ID : 54592721204

Q.4 राकेश आया होगा – यह वाक्य है।

Ans  1. इच्छावाचक

 2. संदेहवाचक

 3. संकेतवाचक

 4. बिस्मयवाचक

Question ID : 54592721194

Q.5 'दाना-पानी उठना' मुहावरा का अर्थ क्या है?

Ans  1. गोद में लेना

 2. मूर्ख बनाकर धोखा देना

 3. जगह छोड़ना


 4. बहुत अपव्यय करना


Question ID : 54592721202

Q.6 "चिड़िया आकाश में उड़ रही हैं।" इस वाक्य में 'उड़ रही' क्रिया किस प्रकार की है?

Ans  1. समापिका

 2. अकर्मक


 3. सकर्मक


 4. असमापिका


Question ID : 54592721196

Q.7 समुच्चयबोधक अव्यय के लोप होने पर प्रयुक्त होता है:

Ans  1. अर्द्धविराम

 2. पूर्व विराम


 3. अविराम

 4. अल्पविराम

Question ID : 54592721203

Q.8 जब दो संयुक्त क्रियाएँ एक साथ प्रयुक्त हों तो कौन-सा चिन्ह लगाया जाता है?

Ans  1. प्रश्नवाचक

 2. अल्पविराम

 3. योजक

 4. पूर्व विराम

Question ID : 54592721201

Q.9 निर्देश: नीचे दिये गये प्रश्न को चार भागो मे बाँटा गया है (A), (B), (C) और (D) क्रमांक दिए गए है। आपको यह देखना है कि वाक्य के किस भाग में व्याकरण, भाषा, वर्तनी, शब्दों के गलत प्रयोग या इसी तरह की कोई त्रुटि तो

नहीं है। यदि त्रुटि होगी तो वाक्य के किसी एक भाग में ही होगी। उस भाग का क्रमांक ही आपका उत्तर है।

वनों की एक बहुत बड़ी उपयोगिता यह भी है कि (A) उनके वातावरण में (B) आवश्यक आद्रता बनी रहती है (C) कोई त्रुटि नहीं है। (D)

- Ans ☒ 1. B
☒ 2. C
☒ 3. A
☒ 4. D

Question ID : 54592721192

Q.10 दिए गए चार विकल्पों में से शुद्ध वाक्य का चयन करें-

- Ans ☒ 1. वह सकुशलपूर्वक रह रहा है।
☒ 2. आपके पिताजी ने बोले थे।
☒ 3. सोनी कल के दिल जाने वाली है।
☒ 4. यह खबर सुनते ही उनके होश उड़ गए।

Question ID : 54592721191

Q.11 _____ वह है, जिसमें सर्वनाम का प्रयोग उसके लिए हो जिसके विषय में कुछ कहा जाता है।

- Ans ☒ 1. अन्यपुरुष
☒ 2. मध्यमपुरुष
☒ 3. उत्तमपुरुष
☒ 4. अवतरणपुरुष

Question ID : 54592721193

Q.12 वह हार गया परन्तु यह आश्चर्य है – यह वाक्य है।

- Ans ☒ 1. सरल वाक्य
☒ 2. मिश्र वाक्य
☒ 3. प्रश्नवाचक वाक्य
☒ 4. संयुक्त वाक्य

Question ID : 54592721190

Q.13 जहाँ पूर्ण विराम की अपेक्षा कम रूकना अपेक्षित हो, वहाँ _____ चिह्न का प्रयोग किया जाता है।

- Ans ☒ 1. पूर्णविराम
☒ 2. अर्द्धविराम
☒ 3. संक्षेप चिह्न
☒ 4. कोष्ठक

Question ID : 54592721197

Q.14 'ईश्वर की माया कहीं धूप-कहीं छाया' लोकोक्ति का अर्थ क्या है?

- Ans ☒ 1. व्यक्ति के अनुसार आवभगत
☒ 2. घोर कष्ट देना
☒ 3. पैसा पास न होना

✗ 4. विपत्ति या बुरा समय आना

Question ID : 54592721200

Q.15 "आसमान पर थूकना" मुहावरा का अर्थ क्या है?

- Ans
- ✗ 1. दिखावटी रूदन
 - ✓ 2. महापुरुषों का निरादर करना
 - ✗ 3. संकट में पड़ना
 - ✗ 4. जगह छोड़ना

Question ID : 54592721198

Comprehension:

निर्देश: नीचे दिये गये अपठित गद्यांश को पढ़िए और प्रश्न के उत्तर दीजिए।
कवि के सम्बंध में यह कथन अक्षरशः सत्य प्रतीत होता है कि कवि प्रकृति का पुरोहित होता है। जिस प्रकार पुरोहित अपने यजमान के समस्त कुलाचारों एवं रीति-परम्पराओं से अभिज्ञ होता है, उसी प्रकार कवि को प्रकृति के समस्त रहस्यों एवं क्रिया प्रक्रियाओं का मर्मज्ञ होना चाहिए। इसके बिना कवि को 'कवि' की संज्ञा से विभूषित करना भी उचित प्रतीत नहीं होता। कवि ही अपनी सूक्ष्म निरीक्षण शक्ति द्वारा प्रकृति के प्रांगण में ऐसे तथ्यों एवं पदार्थों को देख लेता है, जहाँ सामान्य व्यक्तियों की दृष्टि नहीं जाती, और यदि जाती भी है तो तत्व तक नहीं पहुँचती। तब तक पहुँचे बिना कोई ऐसी बात नहीं निकलती, जो साधारण होने पर भी असाधारण हो, लौकिक होने पर भी, अलौकिक आनन्दोत्पादक हो, सबकी देखी होने पर भी, नवीन चमत्कार दिखाने वाली हो, प्रकृति के गुप्त एवं मुक्त रहस्यों को सर्वसाधारण के दृष्टिपथ में लाना कवि का काम है। अज्ञेय की मीमांसा करते रहना, आकाश-कुसुमों की सृष्टि करना या आकाश के तारे तोड़ना कवि का काम नहीं है। यह दार्शनिक का काम है, कवि का काम इससे भी गहन है। व्याकरण एवं पिंगल के नियमानुसार वर्णों की नपी-तुली पद्य रचना का नाम भी कवित्व नहीं है, जैसा कि प्रायः समझा जाता है। सूक्ष्म दृष्टि से प्रकृति पर्यवेक्षण की असाधारण शक्ति के साथ-साथ कवि के पास जीवनानुभवों का अक्षय कोष होना चाहिए तथा उसे विविध कलाओं एवं शास्त्रों का भी ज्ञाता होना चाहिए।

SubQuestion No : 16

Q.16 दार्शनिक का प्रमुख कार्य है:

- Ans
- ✗ 1. ज्ञेय की मीमांसा
 - ✓ 2. परोक्ष की मीमांसा
 - ✗ 3. अपरोक्ष की मीमांसा
 - ✗ 4. मौलिक साहित्य सर्जना

Question ID : 54592721209

Comprehension:

निर्देश: नीचे दिये गये अपठित गद्यांश को पढ़िए और प्रश्न के उत्तर दीजिए।
कवि के सम्बंध में यह कथन अक्षरशः सत्य प्रतीत होता है कि कवि प्रकृति का पुरोहित होता है। जिस प्रकार पुरोहित अपने यजमान के समस्त कुलाचारों एवं रीति-परम्पराओं से अभिज्ञ होता है, उसी प्रकार कवि को प्रकृति के समस्त रहस्यों एवं क्रिया प्रक्रियाओं का मर्मज्ञ होना चाहिए। इसके बिना कवि को 'कवि' की संज्ञा से विभूषित करना भी उचित प्रतीत नहीं होता। कवि ही अपनी सूक्ष्म निरीक्षण शक्ति द्वारा प्रकृति के प्रांगण में ऐसे तथ्यों एवं पदार्थों को देख लेता है, जहाँ सामान्य व्यक्तियों की दृष्टि नहीं जाती, और यदि जाती भी है तो तत्व तक नहीं पहुँचती। तब तक पहुँचे बिना कोई ऐसी बात नहीं निकलती, जो साधारण होने पर भी असाधारण हो, लौकिक होने पर भी, अलौकिक आनन्दोत्पादक हो, सबकी देखी होने पर भी, नवीन चमत्कार दिखाने वाली हो, प्रकृति के गुप्त एवं मुक्त रहस्यों को सर्वसाधारण के दृष्टिपथ में लाना कवि का काम है। अज्ञेय की मीमांसा करते रहना, आकाश-कुसुमों की सृष्टि करना या आकाश के तारे तोड़ना कवि का काम नहीं है। यह दार्शनिक का काम है, कवि का काम इससे भी गहन है। व्याकरण एवं पिंगल के नियमानुसार वर्णों की नपी-तुली पद्य रचना का नाम भी कवित्व नहीं है, जैसा कि प्रायः समझा जाता है। सूक्ष्म दृष्टि से प्रकृति पर्यवेक्षण की असाधारण शक्ति के साथ-साथ कवि के पास जीवनानुभवों का अक्षय कोष होना चाहिए तथा उसे विविध कलाओं एवं शास्त्रों का भी ज्ञाता होना चाहिए।

SubQuestion No : 17

Q.17 'कवि' संज्ञा तभी सार्थकता पा सकती है जब कवि:

- Ans
- ✗ 1. अद्भुत कल्पना- शक्ति का परिचय देता है
 - ✗ 2. दार्शनिक की सी गम्भीर एवं मननशील दृष्टि रखता है
 - ✓ 3. सर्वसाधारण को प्रकृति के रहस्यों से अवगत कराता है

4. आकाश-कुसुमों की सृष्टि नहीं करता है

Question ID : 54592721208

Comprehension:

निर्देश: नीचे दिये गये अपठित गद्यांश को पढ़िए और प्रश्न के उत्तर दीजिए।

कवि के सम्बंध में यह कथन अक्षरशः सत्य प्रतीत होता है कि कवि प्रकृति का पुरोहित होता है। जिस प्रकार पुरोहित अपने यजमान के समस्त कुलाचारों एवं रीति-परम्पराओं से अभिज्ञ होता है, उसी प्रकार कवि को प्रकृति के समस्त रहस्यों एवं क्रिया प्रक्रियाओं का मर्मज्ञ होना चाहिए। इसके बिना कवि को 'कवि' की संज्ञा से विभूषित करना भी उचित प्रतीत नहीं होता। कवि ही अपनी सूक्ष्म निरीक्षण शक्ति द्वारा प्रकृति के प्रांगण में ऐसे तथ्यों एवं पदार्थों को देख लेता है, जहाँ सामान्य व्यक्तियों की दृष्टि नहीं जाती, और यदि जाती भी है तो तत्व तक नहीं पहुँचती। तब तक पहुँचे बिना कोई ऐसी बात नहीं निकलती, जो साधारण होने पर भी असाधारण हो, लौकिक होने पर भी, अलौकिक आनन्दोत्पादक हो, सबकी देखी होने पर भी, नवीन चमत्कार दिखाने वाली हो, प्रकृति के गुप्त एवं मुक्त रहस्यों को सर्वसाधारण के दृष्टिपथ में लाना कवि का काम है। अज्ञेय की मीमांसा करते रहना, आकाश-कुसुमों की सृष्टि करना या आकाश के तारे तोड़ना कवि का काम नहीं है। यह दार्शनिक का काम है, कवि का काम इससे भी गहन है। व्याकरण एवं पिंगल के नियमानुसार वर्णों की नपी-तुली पद्य रचना का नाम भी कवित्व नहीं है, जैसा कि प्रायः समझा जाता है। सूक्ष्म दृष्टि से प्रकृति पर्यवेक्षण की असाधारण शक्ति के साथ-साथ कवि के पास जीवनानुभवों का अक्षय कोष होना चाहिए तथा उसे विविध कलाओं एवं शास्त्रों का भी ज्ञाता होना चाहिए।

SubQuestion No : 18

Q.18 उपर्युक्त गद्यांश का सर्वाधिक उपर्युक्त शीर्षक हो सकता है:

- Ans
- ☐ 1. कविता
 - ☐ 2. प्रकृति
 - ☐ 3. कवि
 - ☒ 4. प्रकृति का पुरोधा: कवि

Question ID : 54592721206

Comprehension:

निर्देश: नीचे दिये गये अपठित गद्यांश को पढ़िए और प्रश्न के उत्तर दीजिए।

कवि के सम्बंध में यह कथन अक्षरशः सत्य प्रतीत होता है कि कवि प्रकृति का पुरोहित होता है। जिस प्रकार पुरोहित अपने यजमान के समस्त कुलाचारों एवं रीति-परम्पराओं से अभिज्ञ होता है, उसी प्रकार कवि को प्रकृति के समस्त रहस्यों एवं क्रिया प्रक्रियाओं का मर्मज्ञ होना चाहिए। इसके बिना कवि को 'कवि' की संज्ञा से विभूषित करना भी उचित प्रतीत नहीं होता। कवि ही अपनी सूक्ष्म निरीक्षण शक्ति द्वारा प्रकृति के प्रांगण में ऐसे तथ्यों एवं पदार्थों को देख लेता है, जहाँ सामान्य व्यक्तियों की दृष्टि नहीं जाती, और यदि जाती भी है तो तत्व तक नहीं पहुँचती। तब तक पहुँचे बिना कोई ऐसी बात नहीं निकलती, जो साधारण होने पर भी असाधारण हो, लौकिक होने पर भी, अलौकिक आनन्दोत्पादक हो, सबकी देखी होने पर भी, नवीन चमत्कार दिखाने वाली हो, प्रकृति के गुप्त एवं मुक्त रहस्यों को सर्वसाधारण के दृष्टिपथ में लाना कवि का काम है। अज्ञेय की मीमांसा करते रहना, आकाश-कुसुमों की सृष्टि करना या आकाश के तारे तोड़ना कवि का काम नहीं है। यह दार्शनिक का काम है, कवि का काम इससे भी गहन है। व्याकरण एवं पिंगल के नियमानुसार वर्णों की नपी-तुली पद्य रचना का नाम भी कवित्व नहीं है, जैसा कि प्रायः समझा जाता है। सूक्ष्म दृष्टि से प्रकृति पर्यवेक्षण की असाधारण शक्ति के साथ-साथ कवि के पास जीवनानुभवों का अक्षय कोष होना चाहिए तथा उसे विविध कलाओं एवं शास्त्रों का भी ज्ञाता होना चाहिए।

SubQuestion No : 19

Q.19 कवि को प्रकृति का पुरोधा कहा गया है क्योंकि वह प्राकृतिक:

- Ans
- ☐ 1. सौन्दर्य का चितेरा होता है
 - ☒ 2. रहस्यों से अभिज्ञ होता है
 - ☐ 3. परम्पराओं से अभिज्ञ होता है
 - ☐ 4. कुलाचारों का विशेषज्ञ होता है

Question ID : 54592721210

Comprehension:

निर्देश: नीचे दिये गये अपठित गद्यांश को पढ़िए और प्रश्न के उत्तर दीजिए।

कवि के सम्बंध में यह कथन अक्षरशः सत्य प्रतीत होता है कि कवि प्रकृति का पुरोहित होता है। जिस प्रकार पुरोहित अपने यजमान के समस्त कुलाचारों एवं रीति-परम्पराओं से अभिज्ञ होता है, उसी प्रकार कवि को प्रकृति के समस्त रहस्यों एवं क्रिया प्रक्रियाओं का मर्मज्ञ होना चाहिए। इसके बिना कवि को 'कवि' की संज्ञा से विभूषित करना भी उचित प्रतीत नहीं होता।

होता। कवि ही अपनी सूक्ष्म निरीक्षण शक्ति द्वारा प्रकृति के प्रांगण में ऐसे तथ्यों एवं पदार्थों को देख लेता है, जहाँ सामान्य व्यक्तियों की दृष्टि नहीं जाती, और यदि जाती भी है तो तत्व तक नहीं पहुँचती। तब तक पहुँचे बिना कोई ऐसी बात नहीं निकलती, जो साधारण होने पर भी असाधारण हो, लौकिक होने पर भी, अलौकिक आनन्दोत्पादक हो, सबकी देखी होने पर भी, नवीन चमत्कार दिखाने वाली हो, प्रकृति के गुप्त एवं मुक्त रहस्यों को सर्वसाधारण के दृष्टिपथ में लाना कवि का काम है। अज्ञेय की मीमांसा करते रहना, आकाश-कुसुमों की सृष्टि करना या आकाश के तारे तोड़ना कवि का काम नहीं है। यह दार्शनिक का काम है, कवि का काम इससे भी गहन है। व्याकरण एवं पिंगल के नियमानुसार वर्णों की नपी-तुली पद्य रचना का नाम भी कवित्व नहीं है, जैसा कि प्रायः समझा जाता है। सूक्ष्म दृष्टि से प्रकृति पर्यवेक्षण की असाधारण शक्ति के साथ-साथ कवि के पास जीवनानुभवों का अक्षय कोष होना चाहिए तथा उसे विविध कलाओं एवं शास्त्रों का भी ज्ञाता होना चाहिए।

SubQuestion No : 20

Q.20 उपर्युक्त गद्यांश के अनुसार सूक्ष्म दृष्टि से प्रकृति पर्यवेक्षण की असाधारण शक्ति के साथ-साथ कवि के पास क्या होना चाहिए?

- Ans
- ☒ 1. उसे विविध कलाओं एवं शास्त्रों का भी ज्ञाता होना चाहिए।
 - ☒ 2. दार्शनिक होना चाहिए।
 - ☒ 3. जीवनानुभवों का अक्षय कोष होना चाहिए।
 - ☒ 4. जीवनानुभवों का अक्षय कोष होना चाहिए और उसे विविध कलाओं एवं शास्त्रों का भी ज्ञाता होना चाहिए।

Question ID : 54592721207